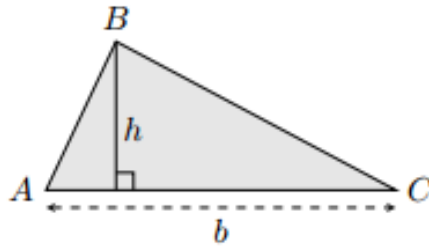
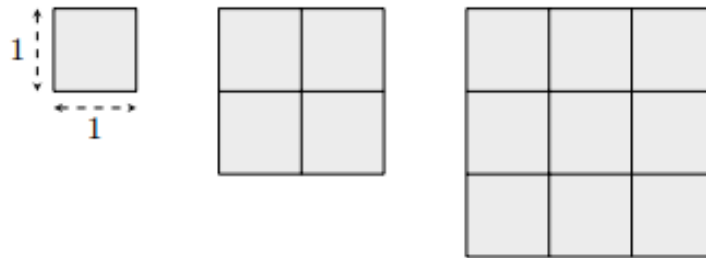


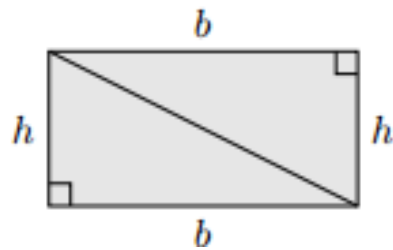
Área do Triângulo: $\frac{\text{base} \times \text{altura}}{2}$



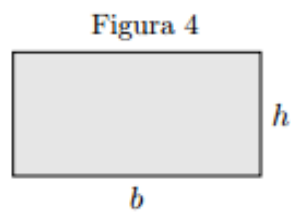
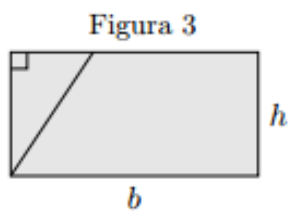
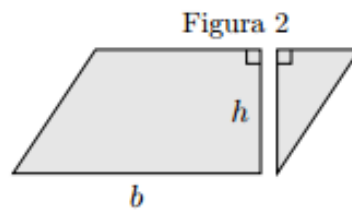
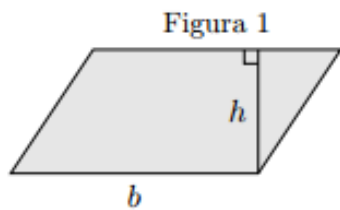
Área do Quadrado: lado x lado



Área do Retângulo: base x altura



Área do Paralelogramo: base x altura



Área do Trapézio: $\frac{(base\ maior + base\ menor) \times altura}{2}$

